



HILLSIDE PRIMARY SCHOOL
BEGINNING OF TERM THREE EXAMINATION
2022

SOCIAL STUDIES WITH RELIGIOUS EDUCATION (SET SEVEN)

Time Allowed: 2 Hours 15 Minutes

Index No.

--	--	--	--	--	--	--	--	--	--

Candidate's Name.....

Candidate's Signature..... Stream

EMIS No.....

District.....

Read the following instructions carefully

1. The paper has **two** sections: **A** and **B**.
2. Answer **all** questions. All answers to both sections **A** and **B** must be written in the spaces provided.
3. **All** answers must be written using a blue or black ball-point pen or fountain pen.
4. Unnecessary changes of work may lead to loss of marks.
5. Any handwriting that cannot easily be read may lead to loss of marks.
6. Do not fill anything in boxes indicated: **"For Examiners' Use Only"** and those inside the paper.

FOR EXAMINERS' USE ONLY		
Qn. No.	MARKS	EXRS' NO
1-10		
11-20		
21-30		
31- 40		
41- 43		
44- 46		
47- 49		
50- 52		
53- 55		
TOTAL		

1 Turn Over

SECTION A (40 MARKS)

1. Name the largest fresh water lake in East Africa.

.....

2. Mention the climatic factor that forced the pastoral tribes to migrate to other areas.

.....

3. Give one way in which traditional crops promote the growth of industries.

.....

4. What helps a person to identify a police officer in a community?

.....

5. How did apartheid practiced in South Africa?

.....

6. Give one problem faced by the government when fulfilling its duties.

.....

7. How can high birth rate be controlled among women?

.....

8. What does the road sign shown below stand for?



.....

9. Which type of soil is good for making pots?

.....


10. Why is Sir Winston Churchill remembered in the history of Uganda?

.....

11. State any one way in which the 1900 Buganda agreement affected Buganda Kingdom.

.....

12. In the space below draw a symbol on the Uganda Coat of Arms that represents the abundant sunshine of Uganda



13. Mention any one pre-colonial trade that took place in Africa?

.....

14. Give one reason why the government of Uganda preserves archaeological sites.

.....

15. State any one way in which people can get their basic needs.

.....

16. Give one way in which agriculture can be improved in Uganda.

.....

17. Name one raw material that is used to make cement.

.....

18. What the use of the weapon below?



.....

19. Give one reason why hydro electricity is mainly generated at the upper stage of a river.

.....

20. Give one factor to consider before choosing a type of transport to use.

.....

21. What title is given to a person who represents the central government in a district?

.....

22. Why did Sir Hesketh Bell encourage cash cop growing in Uganda?

.....

23. How do westerly winds influence the climate of North Western Africa?

.....

24. State any one duty of the judiciary in a democratic country.

.....

25. Which organ of African Union replaced the **OAU** secretariat?

.....

26. Why are lions called wild animals?

.....

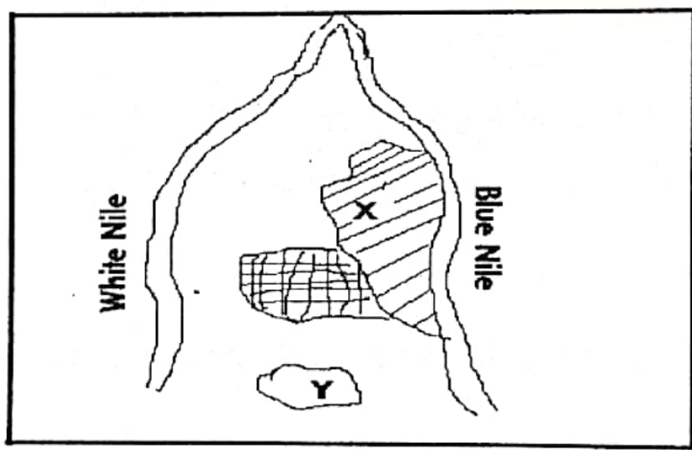
27. Give one way in which children can show respect to their parents.

.....

28. Mention any one human activity that leads to environmental degradation.

.....

Use the diagram below to answer question 29 – 31.



29. Name the irrigation scheme marked X.

.....

30. How is the Blue Nile important to the scheme named in (a) above.

.....

31. How is the irrigation scheme marked X important to Sudan?

32. In which way do radio stations promote economic development in Uganda?

33. State any one reason why multipurpose river projects are established.

34. Which programme was introduced in Uganda to enable all Ugandan children to get free education?

35. Why are Savanna grassland areas suitable for cattle keeping?

For questions 36-40, answer EITHER Christian OR Islamic but NOT both.

36. **Either:** Give one reason why Christians make journeys to holy places.

- Or:** Give one reason why Moslems make journeys to holy places.

37. **Either:** What name is given to the first four books in the New Testament?

- Or:** Which is the shortest Surah in the Quran with only three verses?

38. **Either:** How do Christians reflect the light of Jesus to others?

Or: How do Moslems reflect the light of Allah to others.

39. **Either:** According to the Apostles' Creed, who will come to judge the living and the dead?

Or: Which angel will blow the trumpet on the last day of judgement?

40. **Either:** Why is it important for a Christian to have a good friend?

Or: Why is it important for a Moslem to have a good friend?

SECTION B (60 MARKS)

41. a) Name any two game parks in Uganda.

(i)

(ii)

b) How do game parks contribute to the economic development in Uganda?

c) How do good hotels promote the tourism industry in East Africa?

42. a) What is a common market?

b) Which common market unites West African countries?

c) Which country has the headquarters of EAC?

d) State one way a common market promotes trade within member states.

43. Complete the table below by filling in correct answers.

Government body	Role played
URA	
Electoral Commission	
	Conserves swamps.
	Conserves natural forests.

45. a) Which right of children is abused when they are not taken to school?

b) State any two causes of child abuse.

(i)

(ii)

c) Mention any one effect of child abuse.

.....

46. a) What is rural - urban migration?

.....

.....

b) Give **two** reasons why people practice rural - urban migration.

(i)

(ii)

c) State one problem that is faced in urban areas.

.....

47. a) Mention any two vegetation zones in Africa.

(i)

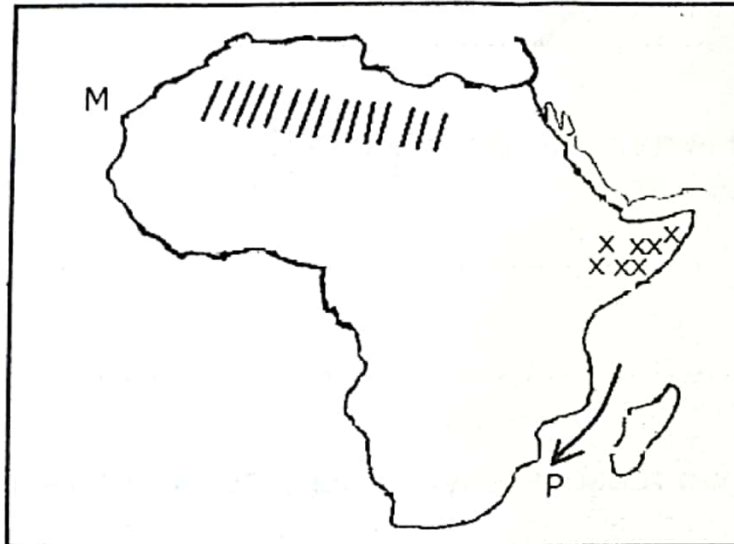
(ii)

b) Give any two human activities that destroy vegetation.

(i)

(ii)

44. Study the map below and answer questions about it.



a) Name one country found in the part of Africa marked xxx?

.....

b) Why is the area shaded above not suitable for crop farming?

.....

c) Use letter K to locate Madagascar.

d) Name the ocean currents marked P.

.....

48. a) Write any two local things used by children to make play materials.

(i)

(ii)

b) State two ways in which games and sports are important to children.

(i)

(ii)

49. a) Why is Bigobyamugenyi important to the Bachwezi in Uganda?

.....

b) Mention two contributions of the Bachwezi to the development of Uganda.

(i)

(ii)

c) Why did the Bachwezi build ditches around their palaces?

.....

50. a) What is population?

.....

.....

b) Mention any two advantages of a country with a high population.

(i)

(ii)

c) Name one factor that promotes population growth in East Africa.

.....

For questions 51-55, answer Either Christianity OR Islamic but Not Both.

51. **Either:** a) Which term is used to refer to religious marriage?

.....

b) Give two reasons why Christians marry.

(i)

(ii)

c) According to the Bible, when is a Christian allowed to re-marry?

.....

Or: a) Which Islamic term is used to refer to religious marriage?

.....

b) State two reasons why Moslems marry.

(i)

(ii)

c) According to Islamic faith, mention one punishment given to a Moslem for committing adultery.

.....

52. Either: a) State two ways in which Christians show love to one another.

(i)

(ii)

b) Mention two qualities of a good Christian.

(i)

(ii)

49. a) Why is Bigobyamugenyi important to the Bachwezi in Uganda?

.....

b) Mention two contributions of the Bachwezi to the development of Uganda.

(i)

(ii)

c) Why did the Bachwezi build ditches around their palaces?

.....

50. a) What is population?

.....

.....

b) Mention any two advantages of a country with a high population.

(i)

(ii)

c) Name one factor that promotes population growth in East Africa.

.....

For questions 51-55, answer Either Christianity OR Islamic but Not Both.

51. **Either:** a) Which term is used to refer to religious marriage?

.....

b) Give two reasons why Christians marry.

(i)

(ii)

c) According to the Bible, when is a Christian allowed to re-marry?

.....

Or: a) Which Islamic term is used to refer to religious marriage?

.....

b) State two reasons why Moslems marry.

(i)

(ii)

c) According to Islamic faith, mention one punishment given to a Moslem for committing adultery.

.....

52. Either: a) State two ways in which Christians show love to one another.

(i)

(ii)

b) Mention two qualities of a good Christian.

(i)

(ii)

Or: a) State two ways in which Moslems show love to one another

(i)

(ii)

b) Mention any two qualities of a good Moslem

(i)

(ii)

53. Either: Match the following correctly.

A

Moses

Joshua

Joseph of Arimathea

Simon Peter

B

raised Tabitha to life

buried the body of Jesus

wrote Pentateuch books

led Israelites to the Promised Land.

(i) raised Tabitha to life.

(ii) buried the body of Jesus.

(iii) wrote Pentateuch books.

(iv) led Israelites to the Promised Land.

Or: Match the following correctly

Prophet Ibrahim	was the father of Prophet Muhammad
Musa	went to heaven and came back
Prophet Muhammad	built the Kaaba
Abdullah	received Taurat.

- (i) was the father of Prophet Muhammad.
- (ii) went to heaven and came back
- (iii) built the Kaaba.
- (iv) received Taurati.

54. Either: “come and follow me, I will make you a different kind of fishermen” (mark 1:17)

a) Who said the above words?

.....

b) Name two people to whom the above words were said.

(i)

(ii)

c) What were those men mentioned in (b) above doing?

.....

Or: “Whoever believes in Allah and offer options prayers throughout each night of Ramadhan will have his sins forgiver”.

a) Who said the above words?

.....

b) Mention any three lessons learnt from the above Hadith.

(i)

(ii)

(iii)

55. Either: a) Give any two Christian beliefs.

(i)

(ii)

b) Mention any two practices among Christians.

(i)

(ii)

Or: a) Give any two Islamic beliefs.

(i)

(ii)

b) Mention any two practices among Moslems.

(i)

(ii)

END